

FACULTY OF SCIENCE

B.Sc.V – Semester (Practical) Examination

Subject: Geology

Paper: V

Question Bank

Time: 2 Hours Max

Marks: 25

I. Identify the Fossils (from 1-6) and write their Morphology, classification, geological age and stratigraphic position of important of Invertebrate fossils? (6×2 = 12Marks)

1.Cidaris, 2.Micraste, 3. Holaster, 4.Hemister, 5.Terebrtula, 6.Spirifer, 7.Rhynchonella.
8.Productus, 9.Turritella, 10.Murex, 11.Cypraea, 12.Natica, 13.Valuta, 14.Pecten,
15.Gryphaea, 16.Arca, 17.Cardita, 18.Exogyra, 19.Nautilus, 20.Ammonoids.
21.Bellemnites, 22.Calymene, 23.Paradoxide, 24.Corals, and 25.Graptolites.

II. Identify the Fossil 7 and drawing their figure, Morphology, classification, geological age and stratigraphic position of important of Invertebrate fossils? (1×3= 3Marks)

1.Cidaris, 2.Micraste, 3. Holaster, 4.Hemister, 5.Terebrtula, 6.Spirifer, 7.Rhynchonella.
8.Productus, 9.Turritella, 10.Murex, 11.Cypraea, 12.Nautica, 13.Valuta, 14.Pecten,
15.Gryphaea, 16.Arca, 17.Cardita, 18.Exogyra, 19.Natilus, 20.Ammonoids.
21.Bellemnites, 22.Calymene, 23.Paradoxide, 24.Corals, and 25.Graptolites.

III. Identify the Fossils 8 and Morphology, classification, geological age and stratigraphic position of important of Plant fossils? (1×2 = 2Marks)


1.Glossopteris, 2.Gangamopteris, and 3.Ptylophyllum

IV. Identify the Fossils 9 and drawing their figure, Morphology, classification, geological age and stratigraphic position of important of Plant fossils? (1×3= 3Marks)

1.Glossopteris, 2.Gangamopteris, and 3.Ptylophyllum

V. Record

(1×5= 5Marks)



CHAIRMAN

Board of Studies in Geology

Andhra University, Hyderabad-7(T.S.)

Faculty of science
B.Sc V Semester (Practical Examination)
Subject: Environmental Geology
Paper VI (Elective)
Question Bank

QUESTION NO.1

Determine the grain size distribution from the given data

(3X1= 3M)

A.

S. No	1	2	3	4	5	6	7	8	9	10
Size of the Grains	0.05	0.06	0.12	0.16	0.18	0.35	.050	0.71	1.18	2.0
Weight of the sample	3.30	7.22	0.15	73.90	126.50	44.91	15.29	20.26	4.0	3.59

B.

S. No	1	2	3	4	5	6	7	8	9	10	11	12	13
Size of the Grains	0.05	0.06	0.12	0.16	0.18	0.35	.050	0.71	1.51	2.0	5	10	12
Weight of the sample	1.762	0.720	0.200	10.255	7.309	6.250	4.931	15.431	21.925	38.185	5.030	13.00	15.05

C.


S. No	1	2	3	4	5	6	7
Size of the Grains	0.35	0.50	0.71	1.51	2.0	5	7
Weight of the sample	6	30	64	6	34	26	34

D.

S. No	1	2	3	4	5	6	7	8
Size of the Grains	4.75	20.0	0.84	0.425	0.250	0.150	0.075	0.025
Weight of the sample	9.74	39.50	75.60	129.10	107.40	8.50	4.20	6.58

E.

S. No	1	2	3	4	5	6	7	8	9	10	11	12
Size of the Grains	10	5	2	1.18	0.71	0.5	0.35	0.25	0.18	0.12	0.06	0.05
Wt of the sample	13	5.030	38.185	21.925	15.435	6.250	7.309	10.255	0.200	0.720	1.762	2.054



CHAIRMAN
 Board of Studies in Geology
 Osmania University, Hyderabad-7(T.S.)

QUESTION NO. II

Determine the physical properties of the Industrial minerals

(2X2 = 4M)

2. Barite 3. Asbestos 4. Clay 5

. Coal 6. Kyanite 7. Gypsum 8. Quartz 9. Mica 10. Feldspars

(2x1 = 2M)

QUESTION NO. III.

Study the beach profile

11.

12.

13.



(3X1 = 3M)

QUESTION NO. IV

1. The alkalinity and hardness of a water sample are 250mg/l and 350mg/l calculate CaCO₃ of the given water sample.

2. Water contains following dissolved ions Na⁺ = 56 mg/l; Ca⁺² = 40mg/l; Al⁺³ = 3mg/l; Ph = 7; HCO₃⁻ = 190mg/l Mg⁺² = 30 mg/l Cl⁻ = 165mg/l Calculate total hardness of the sample in mg/l as Ca CO₃

(equivalent weight of Ca CO₃ = 50)

3. Water contains following dissolved ions Ca⁺² = 40mg/l; Al⁺³ = 3mg/l; Ph = 7; HCO₃⁻ = 30mg/l Mg⁺² = 18 mg/l; CO₃^{= 5}; Ca⁺² = 12 ; Cl⁻ = 15mg/l; SO₄⁻² = 15; Ph = 8.5 Calculate total hardness of the sample in mg/l as Ca CO₃ (equivalent weight of Ca CO₃ = 50)

(2x1 = 2M)

QUESTION NO. V

1. Ph of water incoming water is 7.2 and out coming water is 8.4. Find the average value of Ph of the water sample.

2. Find the Ph of the given sample if OH⁻ ion concentration is 10^{-5.6} milli moles/litres (convert milli moles to moles/liter) and interpret the nature of the sample.

3. If Ph of the water sample is given as 9.25 then find the concentration of hydroxyl ion

(3x1 = 3M)

QUESTION NO. VI

1. Estimation of Manganese by spectrophotometric method and write the procedure for the experiment.
2. Estimation of Oxygen dissolved by the titrimetric method with procedure.
3. Estimation of Sodium by Flame photometer with procedure

(3x1 = 3M)

QUESTION NO. VII

Sieve Analysis with procedure

(1x5 = 5M)

QUESTION NO. VIII

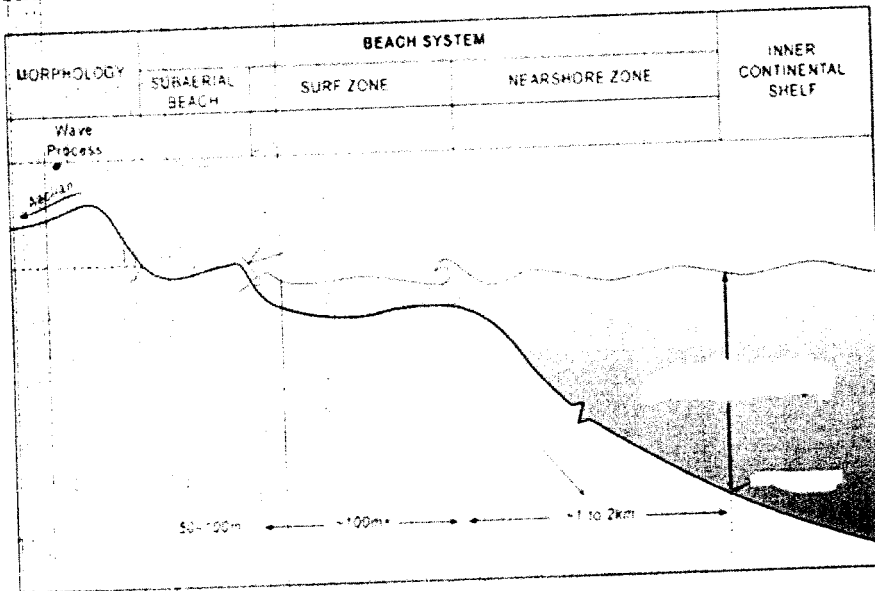
RECORD

11.

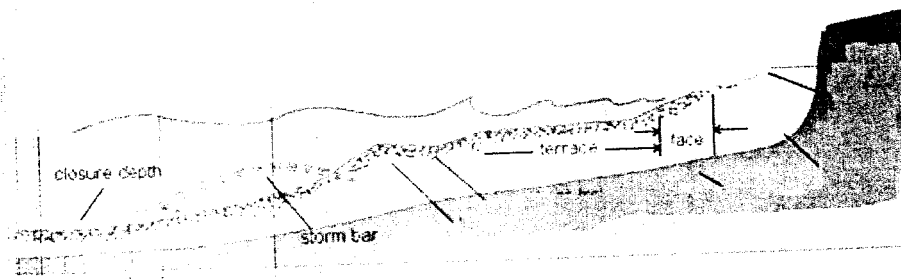
SUMMER BEACH

WINTER BEACH

12.



13.



CHAIRMAN
Board of Studies in Geology
University, Hyderabad-7(T.S.)

Faculty of science

B.Sc IV Semester (Practical Examination)

Subject: Hydrogeology

Paper VI (Elective)

Question Bank

Max. Marks: 25

Time 2 hours

(1x2.5 = 2.5M)

QUESTION NO.1

a. A constant head permeability test has been run on a sand sample of 25cm in length and 30cm² in area under a head of 40cm. The discharge was found to be 200 cc in 116 seconds. Determine the coefficient of permeability.

b. Falling head permeability test has been done on a relatively fine grained soil sample 20cm in length and 25cm² in area. In the sand pipe, the initial head h_0 is 0.5 cm and the final reading of h_f is 0.25cm after a time lapse of 8 min. The diameter of the sand pipe is 2.51cm. Calculate the permeability of the given soil sample.

c. An unsaturated core sample is obtained from a sandy material at a distance of about 50 cm above water table. The core is 10.186cm height and 5 cm in diameter. The net weight of sample in air is 147.6 gms, weight of the sample after saturation of water is 87.08gms. Weight of the sample in air is 152.14gms. Calculate the grain volume, bulk volume, bulk density, apparent density and porosity of the sample.

(1x3 = 3M)

QUESTION NO. II

Determine the Uniform Co-efficient from the Grain size distribution data of the River alluvium

A.

S.No	1	2	3	4	5	6	7	8
Size of the Grains (mm)	4.20	8.50	105.08	107.40	120.10	71.00	39.80	9.79
Wt of the sample in gms	0.89	1.79	22.20	22.16	27.17	15.10	8.32	2.06

B.

S. No	1	2	3	4	5	6	7	8	9	10	11	12
Size of the Grains (mm)	0.05	0.06	0.12	0.16	0.18	0.25	.050	0.71	1.51	2.0	5	10
Wt of the sample in gms	1.762	0.720	0.200	10.255	7.309	7.306	4.931	15.431	21.925	38.185	5.030	13.00

C.

S. No	1	2	3	4	5	6	7
Size of the Grains (mm)	0.35	0.50	0.71	1.18	2.0	5	10
Wt of the sample in gms	6	30	64	6	34	26	34

CHAIRMAN
Board of Studies in Geology
Osmania University, Hyderabad-7(T.S.)

D.

S. No	1	2	3	4	5	6	7	8
Size of the Grains(mm)	0.35	0.50	0.71	1.18	2.0	5	10	0.35
Wt of the sample in gms	9.74	39.50	75.60	129.10	107.40	8.50	4.20	6.58

E.

S. No	1	2	3	4	5	6	7	8	9	10	11	12
Size of the Grains(mm)	4.25	4.00	3.75	3.50	3.25	3.00	2.75	2.50	2.25	2.00	1.75	1.50
Wt of the sample in gms	0.72	4.87	1.50	13.41	15.13	23.94	36.62	25.12	3.72	13.88	1.75	0.88

F.

S. No	1	2	3	4	5	6	7	8	9	10
Size of the Grains(mm)	0.05	0.06	0.12	0.16	0.18	0.25	.050	0.71	1.51	2.0
Wt of the sample in gms	3.30	7.22	0.15	73.90	126.50	44.91	15.29	20.26	4.00	3.59

QUESTION NO. III.

(1x2.5 = 2.5M)

Determine the pH Electrical conductivity and TDS in the given water sample

QUESTION NO. IV


(1x2= 2M)

Describe the Well inventory data details of the given area in detail and explain.

QUESTION NO. V

(1x2.5=2.5M)

Draw a Water table contour map, show the regional direction of flow and comment on the nature of the Stream



[Handwritten Signature]

CHAIRMAN
Board of Studies in Geology
Osmania University, Hyderabad-7(T.S.)

QUESTION NO. VI**(1x5= 5M)**

Determine the resistivity thickness of subsurface strata from the given VES data

Data - 1			Data-2			Data-3		
S.No	AB/2	ρ_a	S.No	AB/2	ρ_a	S.No	AB/2	ρ_a
1	2	50	1	2	40	1	2	30
2	5	39	2	5	12.5	2	5	30
3	8	21	3	8	4.8	3	8	27
4	10	17	4	10	3.5	4	10	21
5	15	9.5	5	15	3.0	5	15	14
6	20	7.5	6	20	3.	6	20	10
7	25	7.5	7	30	3.5	7	25	9
8	30	7.8	8	40	4.5	8	30	9.2
9	35	8	9	50	5.0	9	35	10
10	40	9.4	10	60	6.0	10	40	11
11	50	11	11	70	7.0	11	50	13
12	60	12.5	12	80	8.0	12	60	16
13			13	90	9.0	13	70	18
14			14	100	10.0	14	80	20

Data - 4

Data-5

Data-6

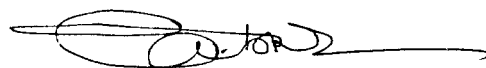
S.No	AB/2	ρ_a	S.No	AB/2	ρ_a	S.No	AB/2	ρ_a
1	2	12	1	2	10	1	2	30
2	5	10	2	5	12	2	5	48
3	8	7	3	8	13.8	3	8	59
4	10	5	4	10	14	4	10	62
5	15	3.7	5	15	14.5	5	15	75
6	20	3.8	6	20	15	6	20	90
7	25	5	7	30	16	7	25	120
8	30	6	8	40	16.5	8	30	145
9	35	6.8	9	50	18	9	35	180
10	40	8.2	10	60	20	10	40	200
11	50	10	11	70	22	11	50	330
			12	80	25			
			13	90	30			
			14	100	38			

QUESTION NO. VII**(1x2.5 = 2.5M)**

Draw the hydro geological and drainage features of the given Satellite Imagery (FCC) with emphasis on Geological lineaments of the given map

(1x5 = 5M)

RECORD

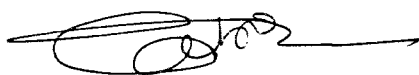


CHAIRMAN
Board of Studies in Geology
Osmania University, Hyderabad-7(T.S.)

Q No - IV

WELL INVENTORY DATA COLLECTION

S.No.	Item	Date:		
1	Village/Town		Mandal/District	
1a	Well location			
2	Toposheet			
3	Co-ordinates	NL:	EL:	
4	Elevation (m)			
5	Basin/ Sub-basin		Watershed	
6	Geomorphology		Local Topography	
7	Type of well	BW/HP/DW		
8	Owner's Name			
9	Total Depth (m)		weathering thick ness (m)	
10	Length of Casing (m)		Year of Construction	
11	Water bearing zone			
12	Aquifer	I/II/III/ Cumulative	Geology	WG/WFG/FG/AL
13	DTW (mbgl)			
14	Use	Irrigation/Domestic		
15	Discharge (lps)			
16	HP	3/5/7.5	Delivery pipe dia (")	
17	Season	Crop	Daily pumpage (Hrs) / No. of Days of Pumping	Area (Acres)
a	Khariff (June-Sept)	Paddy/Non-Paddy		
b	Rabi (Oct-Jan)	Paddy/Non-Paddy		
c	Summer Crop	Paddy/Non-Paddy		
d			Annual Draft	
18	Recharge Source, if any nearby (distance)			
19	Status of Village Water Supply			
20	Information related to Bore-well success rate / fracture zones daph / recharge structures / Watershed committee in the Village / nearby			
21	Any other relavent information:			

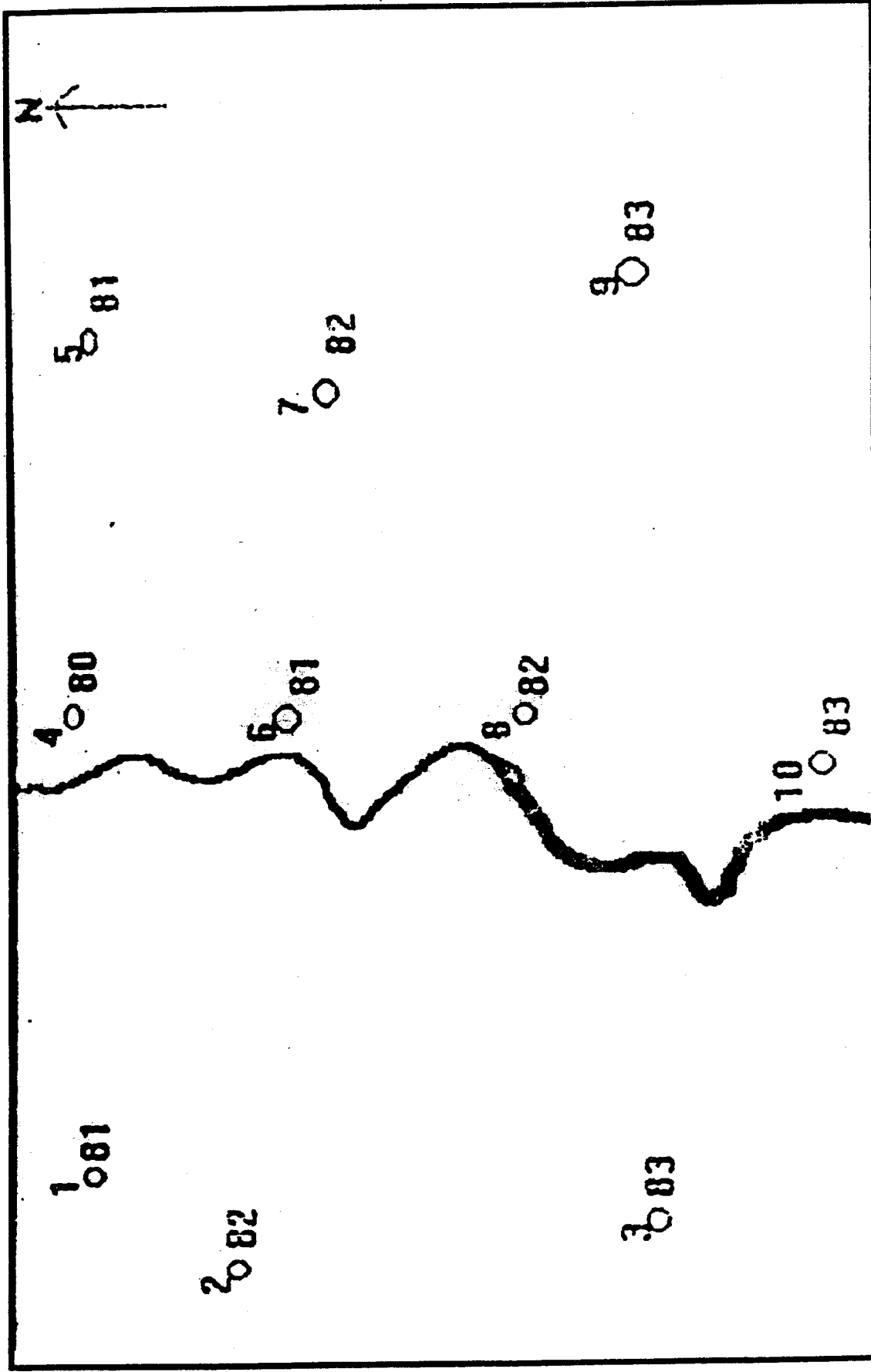


Signature

CHAIRMAN
Board of Studies in Geology
Osmania University, Hyderabad-7(T.S.)

Wells showing elevation of water table

7

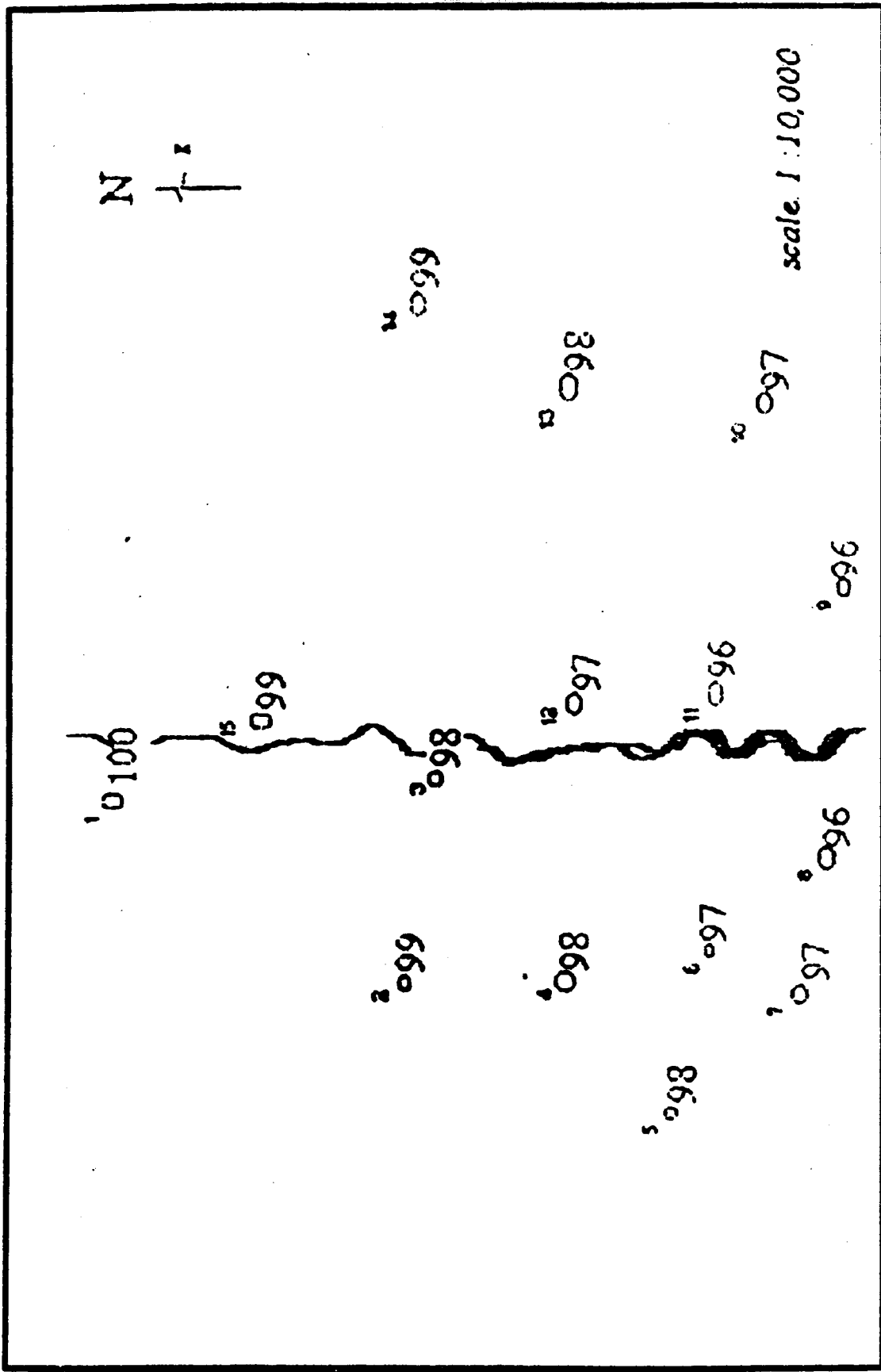


Draw water table contour map, show the regional direction of flow and comment on the nature of the stream.

[Handwritten signature]

CHAIRMAN

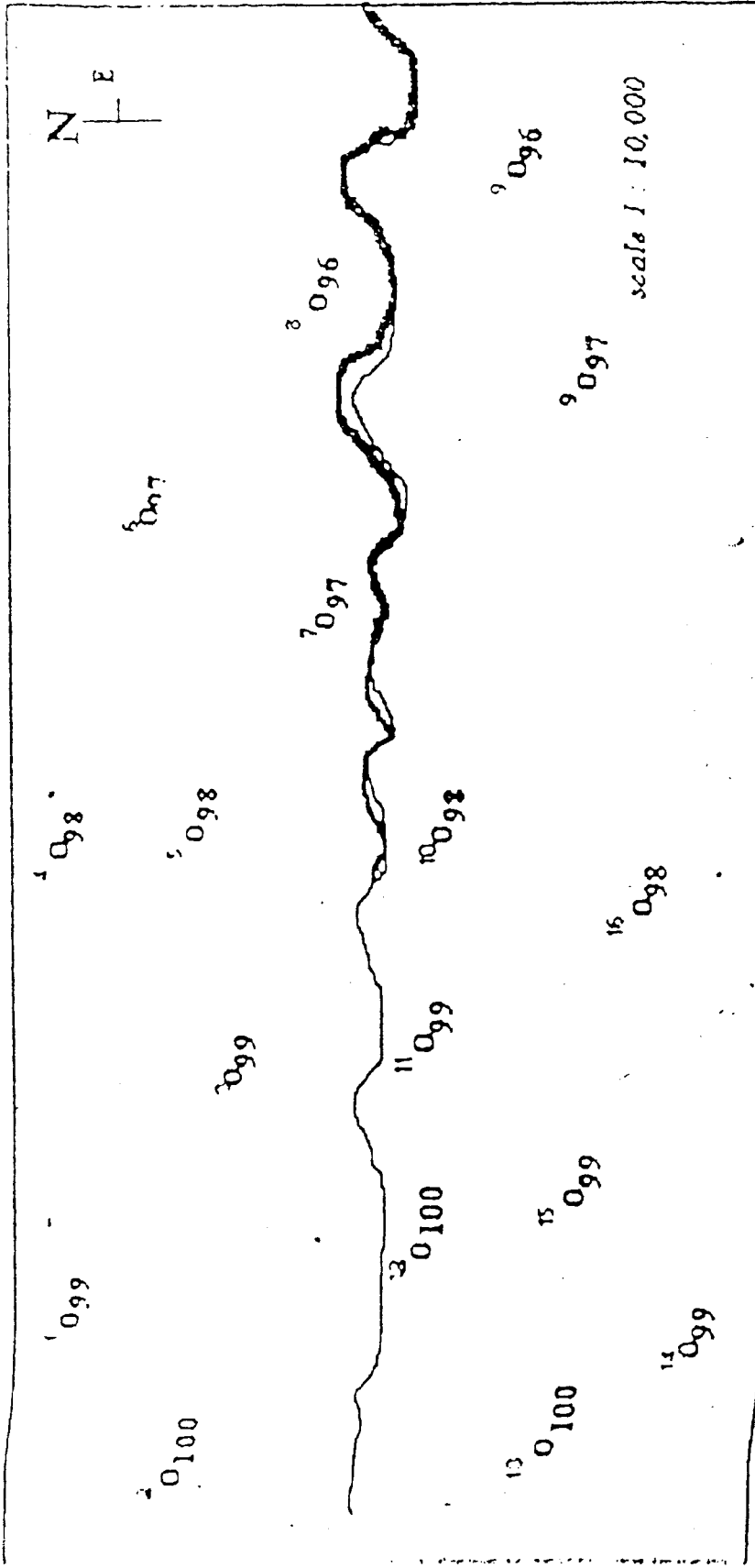
Wells showing elevation of water table



Draw water table contour map, show the regional direction of flow and comment on the nature of the stream.


CHAIRMAN

Wells showing elevation of water table

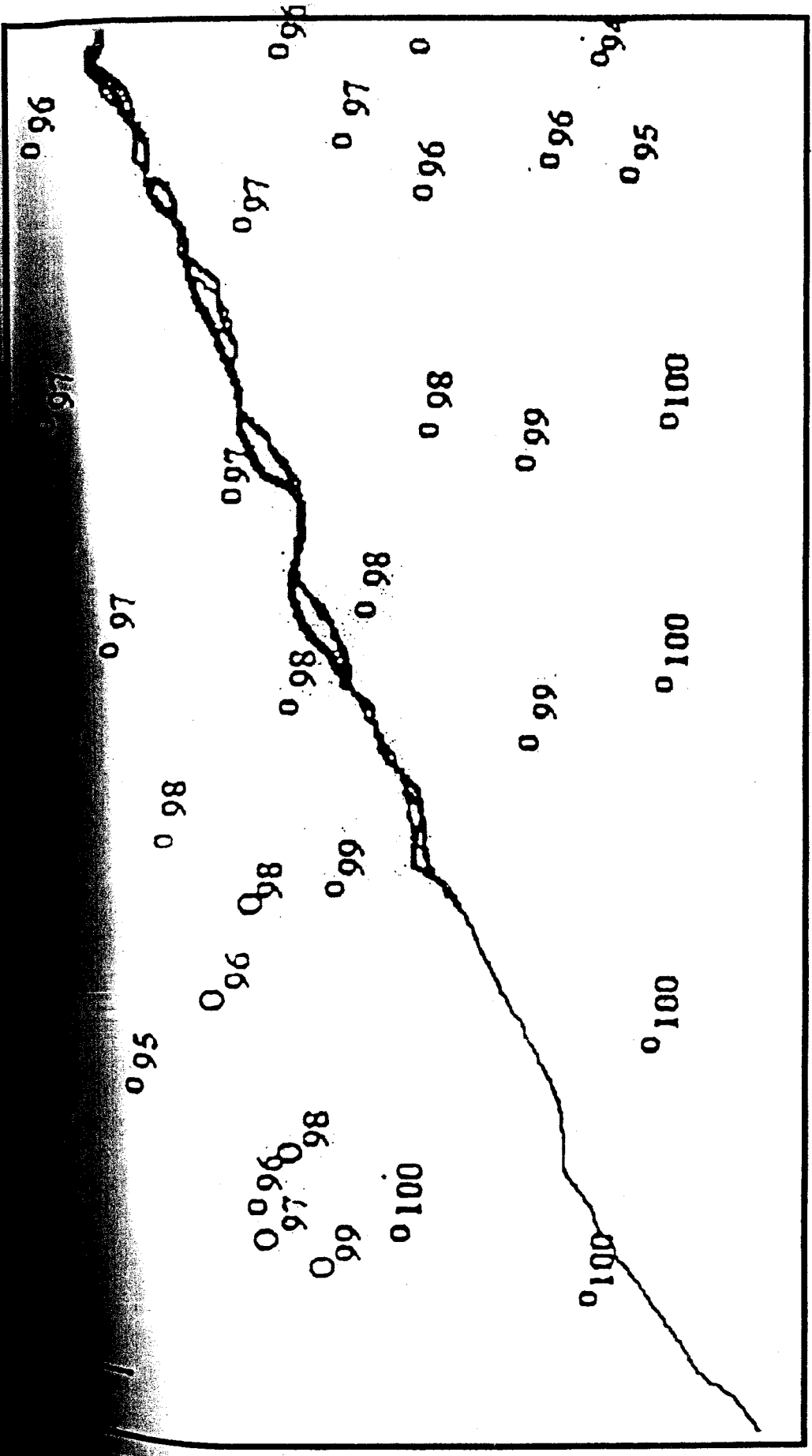


Draw water table contour map, show the regional direction of flow and comment on the nature of the stream



CHAIRMAN
 Board of Studies in Geology
 Osmania University, Hyderabad-7(T.S.)

Wells showing elevation of water table



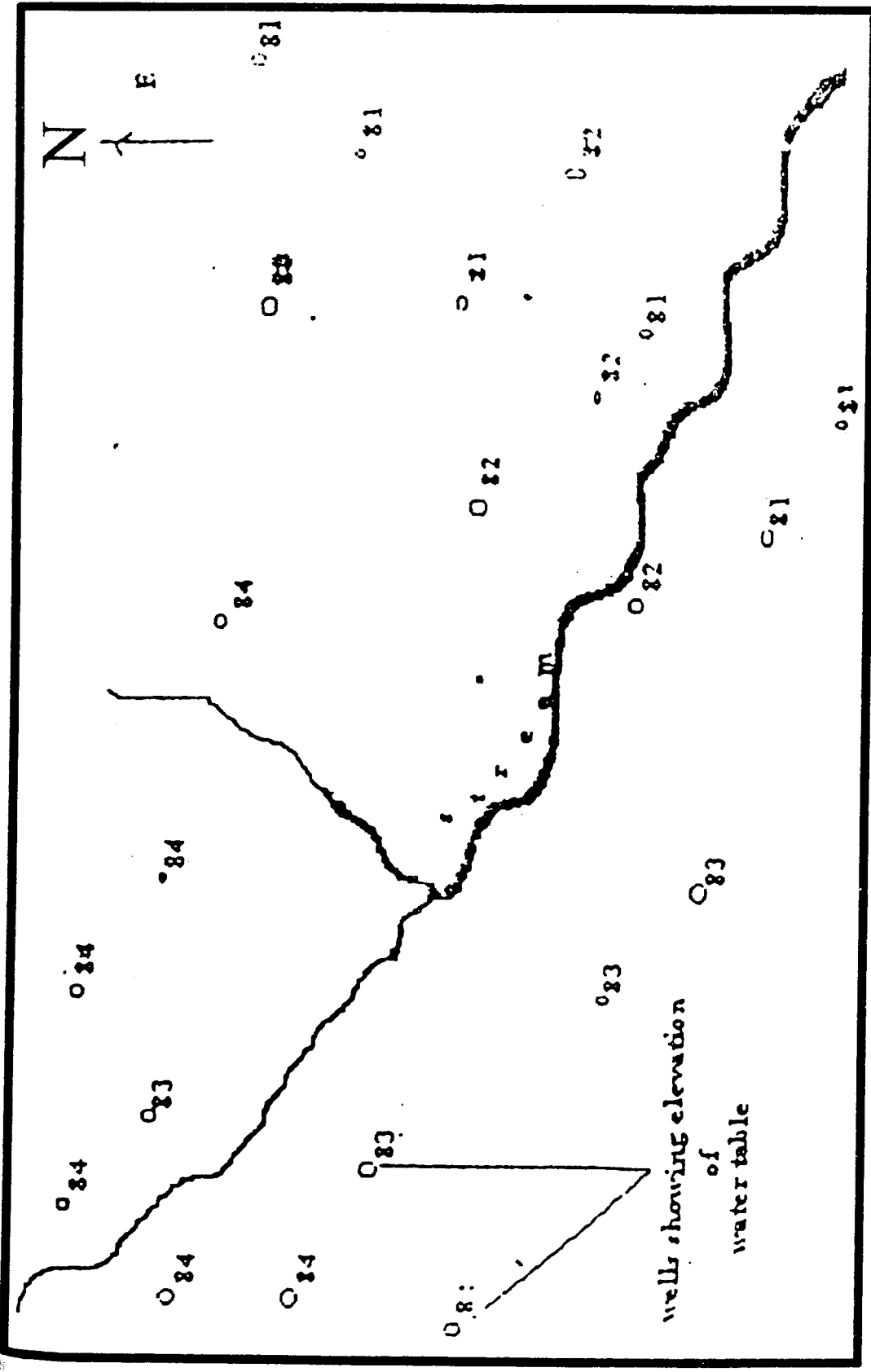
Draw water table contour map, show the regional direction of flow and comment on the nature of the stream

[Signature]

CHAIRMAN

Board of Studies in Geology
Osmania University, Hyderabad (T.S.)

Showing elevation of water table



Draw water table contour map, show the regional direction of flow and comment on the nature of the stream

[Handwritten signature]

CHAIRMAN

Board of Studies in Geology

Osmania University, Hyderabad-7(T.S.)

www.genesisrocksandminerals.com